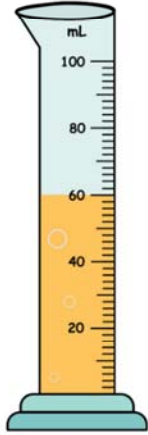



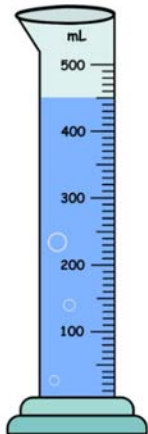

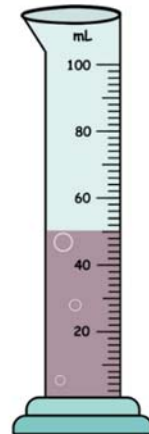



Name _____

Graduated Cylinders

Circle the correct answer.

<p>1. </p> <p>50 mL 60 mL</p>	<p>2. </p> <p>15 mL 10 mL</p>	<p>3. </p> <p>400 mL 450 mL</p>	<p>4. </p> <p>300 mL 200 mL</p>
<p>5. </p> <p>450 mL 400 mL</p>	<p>6. </p> <p>250 mL 300 mL</p>	<p>7. </p> <p>45 mL 50 mL</p>	<p>8. </p> <p>25 mL 30 mL</p>