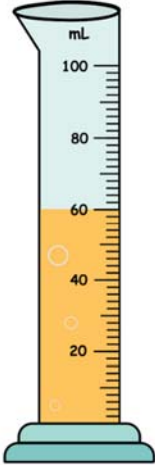



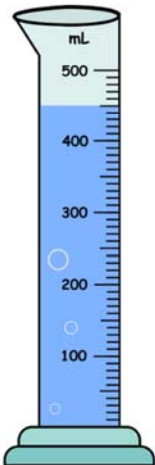

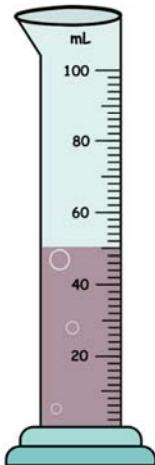
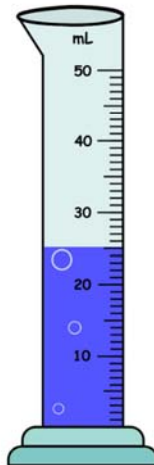


Name _____

Graduated Cylinders

Circle the correct answer.

<p>1.</p>  <p>50 mL 60 mL</p>	<p>2.</p>  <p>15 mL 10 mL</p>	<p>3.</p>  <p>400 mL 450 mL</p>	<p>4.</p>  <p>300 mL 200 mL</p>
<p>5.</p>  <p>450 mL 400 mL</p>	<p>6.</p>  <p>250 mL 300 mL</p>	<p>7.</p>  <p>45 mL 50 mL</p>	<p>8.</p>  <p>25 mL 30 mL</p>