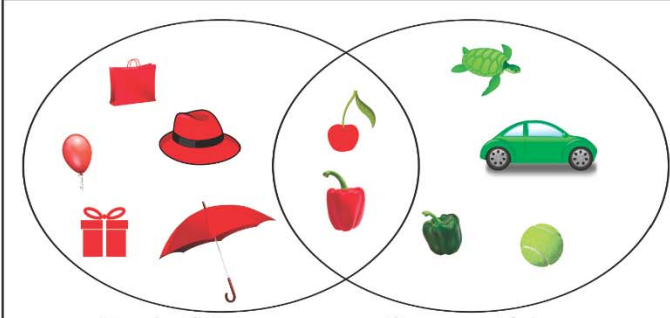


Name _____

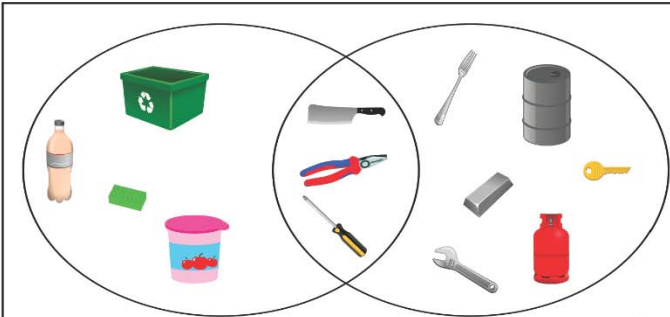
Venn Diagrams

Read the Venn Diagram below and answer the following questions.



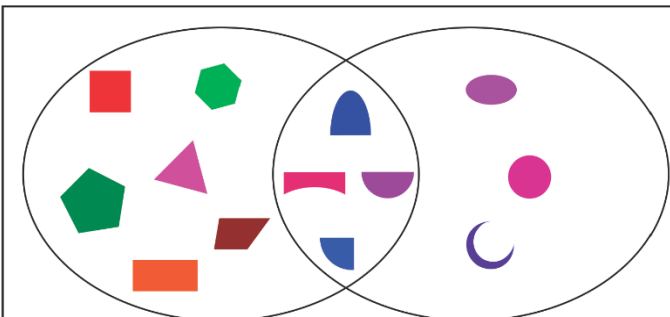
A Venn diagram with two overlapping circles. The left circle is labeled 'Red things' and contains five items: a red bag, a red hat, a red balloon, a red gift box, and a red umbrella. The right circle is labeled 'Green things' and contains five items: a green turtle, a green car, a red cherry, a green bell pepper, and a green lime. The intersection of the two circles is empty.

How many things are?	
Red	5
Green	4
Both	2



A Venn diagram with two overlapping circles. The left circle is labeled 'Made with plastic' and contains five items: a plastic bottle, a green recycling bin, a green sponge, a pink bucket, and a blue container. The right circle is labeled 'Made with metal' and contains five items: a metal fork, a metal barrel, a metal key, a metal wrench, and a metal bottle. The intersection of the two circles contains three items: a pair of pliers, a screwdriver, and a metal bar.

Things made with?	
Metal	6
Plastic	4
Both	3



A Venn diagram with two overlapping circles. The left circle is labeled 'Straight sides' and contains six shapes: a red square, a green pentagon, a green pentagon, a purple triangle, an orange rectangle, and a brown trapezoid. The right circle is labeled 'Curved sides' and contains four shapes: a blue semi-circle, a purple oval, a pink circle, and a purple crescent moon. The intersection of the two circles contains four shapes: a blue semi-circle, a purple semi-circle, a pink semi-circle, and a blue semi-circle.

How many Shapes have?	
Curved	3
Straight	6
Both	4