


Name _____

Measurement


Color the blocks to measure the length of each object.
Write the number in the circle.

1	2	3	4	5	6	7	8	9	10
---	---	---	---	---	---	---	---	---	----




9

1	2	3	4	5	6	7	8	9	10
---	---	---	---	---	---	---	---	---	----



7

1	2	3	4	5	6	7	8	9	10
---	---	---	---	---	---	---	---	---	----



3