

Name _____

Liquid Measurements

Color in the number of cups, pints or quarts needed to equal amounts.



1 cup

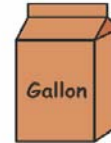


2 cups = 1 pint



4 cups = 1 quart




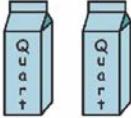

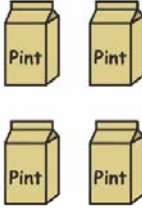


2 pints = 1 quart



16 cups = 1 gallon

8 pints = 1 gallon

4 quarts = 1 gallon

 Cup Cup Cup Cup Cup Cup Cup Cup Cup	 Quart Quart Quart Quart Quart Quart Quart Quart
 Pint Pint Pint Pint Pint Pint Pint Pint Pint Pint	 Pint Pint Pint Pint Pint Pint Pint Pint
 Pint Pint Pint Pint Pint Pint	 Cup Cup Cup Cup Cup Cup Cup Cup Cup
 Cup Cup Cup Cup Cup Cup	 Pint Pint Pint Pint Pint Pint Pint Pint Pint Pint