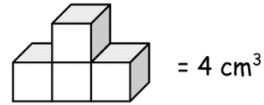
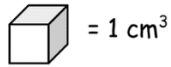


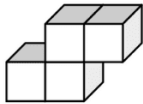
Name _____

Measures of Volume

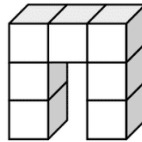
Count the cubes and find the volume of each shape in cm^3 .



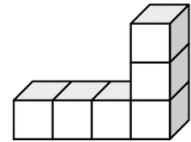
1.



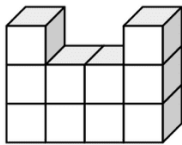
2.



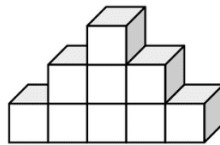
3.



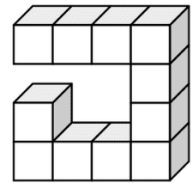
4.



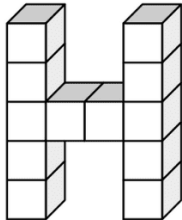
5.



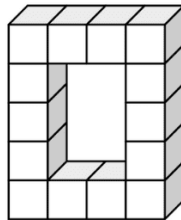
6.



7.



8.



9.

