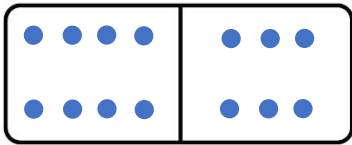


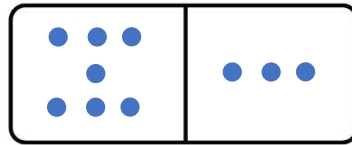
Name \_\_\_\_\_

# DOMINO SUBTRACTION

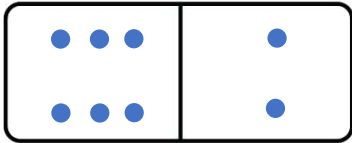
Make the dots on each domino according to the correct number, subtract and write the correct answer.



$$8 - 6 = \underline{2}$$



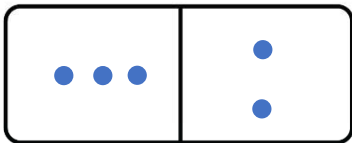
$$7 - 3 = \underline{4}$$



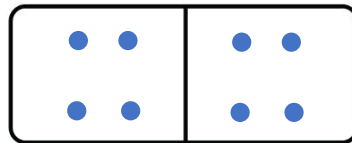
$$6 - 2 = \underline{4}$$



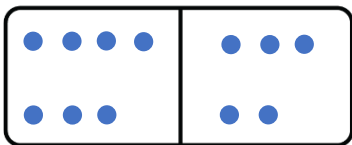
$$2 - 1 = \underline{1}$$



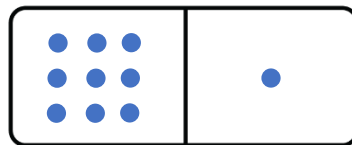
$$3 - 2 = \underline{1}$$



$$4 - 4 = \underline{0}$$



$$7 - 5 = \underline{2}$$



$$9 - 1 = \underline{8}$$