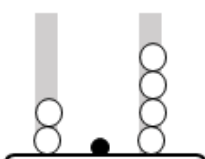
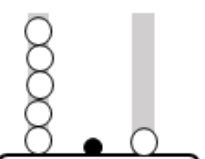
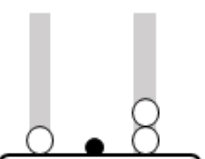
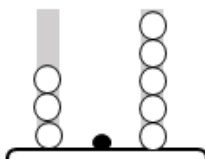
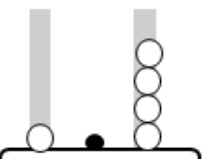
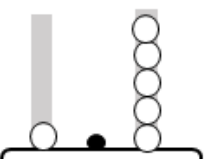
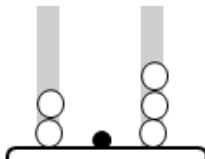
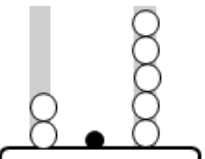
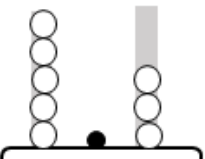
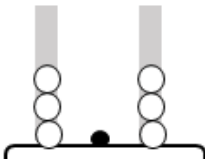
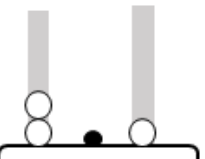
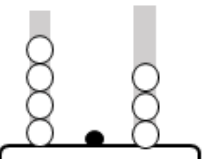


NAME: _____

TENTHS

Count the number of ONES and TENTHS and then put them together.

 ONES TENTHS	 ONES TENTHS	 ONES TENTHS
How MANY? <u>2.4</u>	How MANY? <u>5.1</u>	How MANY? <u>1.2</u>
 ONES TENTHS	 ONES TENTHS	 ONES TENTHS
How MANY? <u>3.5</u>	How MANY? <u>1.4</u>	How MANY? <u>1.5</u>
 ONES TENTHS	 ONES TENTHS	 ONES TENTHS
How MANY? <u>2.3</u>	How MANY? <u>2.5</u>	How MANY? <u>5.3</u>
 ONES TENTHS	 ONES TENTHS	 ONES TENTHS
How MANY? <u>3.3</u>	How MANY? <u>2.1</u>	How MANY? <u>4.3</u>

How Did You Do? 😊 😐 ☹️