

Name \_\_\_\_\_

# Division using Models



Write how many groups of 4 can be made? \_\_\_\_\_



Write how many groups of 3 can be made? \_\_\_\_\_



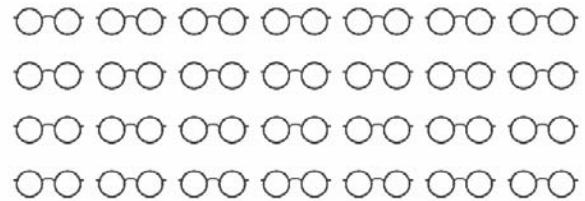
Write how many groups of 4 can be made? \_\_\_\_\_



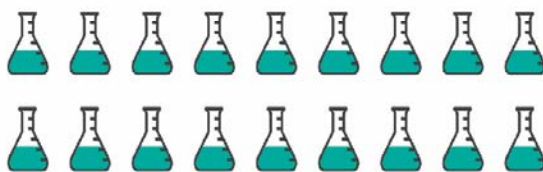
Write how many groups of 5 can be made? \_\_\_\_\_




Write how many groups of 6 can be made? \_\_\_\_\_



Write how many groups of 4 can be made? \_\_\_\_\_



Write how many groups of 3 can be made? \_\_\_\_\_



Write how many groups of 7 can be made? \_\_\_\_\_