



Name _____




Subtraction


$$\begin{array}{r} 7 \\ -5 \\ \hline \end{array}$$


2


$$\begin{array}{r} 8 \\ -2 \\ \hline \end{array}$$


6


$$\begin{array}{r} 4 \\ -3 \\ \hline \end{array}$$


1


$$\begin{array}{r} 9 \\ -6 \\ \hline \end{array}$$


3


$$\begin{array}{r} 5 \\ -4 \\ \hline \end{array}$$


1


$$\begin{array}{r} 6 \\ -6 \\ \hline \end{array}$$


0


$$\begin{array}{r} 7 \\ -4 \\ \hline \end{array}$$

3


$$\begin{array}{r} 8 \\ -6 \\ \hline \end{array}$$

2


$$\begin{array}{r} 9 \\ -5 \\ \hline \end{array}$$

4