



Name \_\_\_\_\_

# DOMINO SUBTRACTION

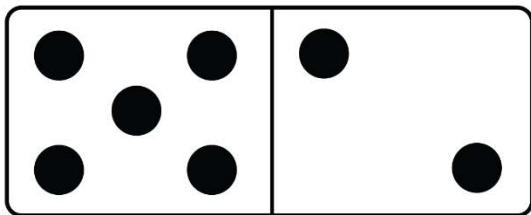
Count the dots and subtract on each domino and fill in the total.



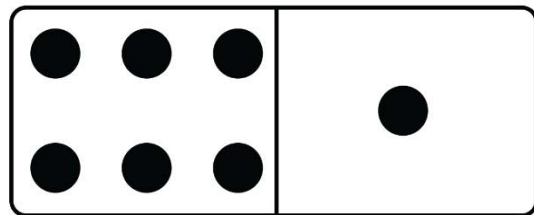
$$\underline{3} - \underline{1} = \boxed{0}$$



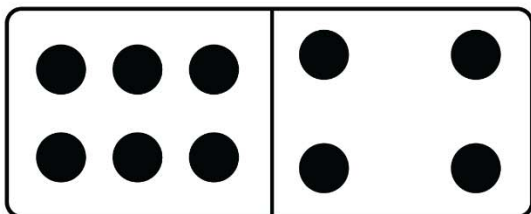
$$\underline{6} - \underline{2} = \boxed{4}$$




$$\underline{5} - \underline{2} = \boxed{3}$$



$$\underline{6} - \underline{1} = \boxed{5}$$



$$\underline{6} - \underline{4} = \boxed{2}$$



$$\underline{9} - \underline{3} = \boxed{6}$$