


NAME: _____

MULTIPLICATION AS REPEATED ADDITION

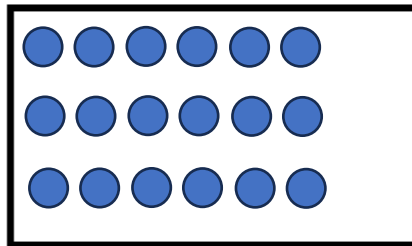
Draw rows of dots to build the array for each addition equation!

EXAMPLE:

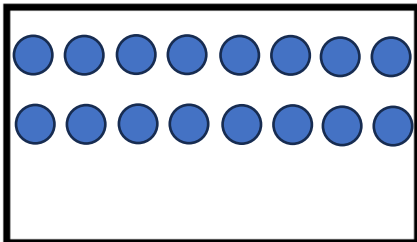
$$5 + 5 + 5 = 15$$



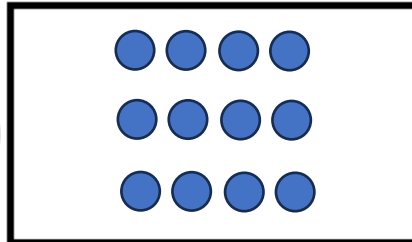
$$6 + 6 + 6 = 18$$



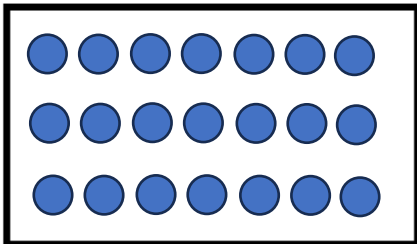
$$8 + 8 = 16$$



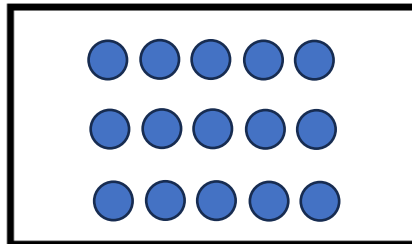
$$4 + 4 + 4 = 12$$



$$7 + 7 + 7 = 21$$



$$5 + 5 + 5 + 5 = 20$$



How Did You Do?

