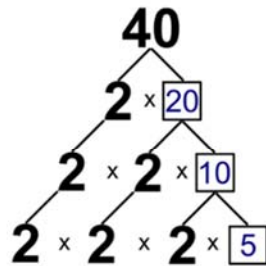


Name _____

Prime Factorization

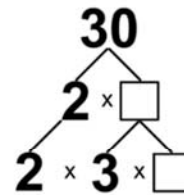
Complete each factor tree and write the prime factorization of each number.

1) 40



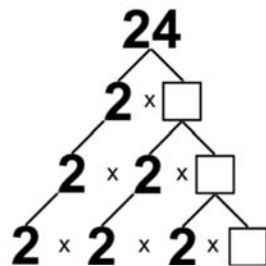
$40 = 2 \times 2 \times 2 \times 5$

2) 30



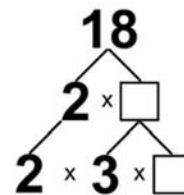
$30 =$

3) 24



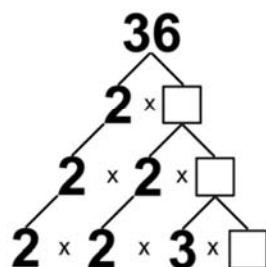
$24 =$

4) 18



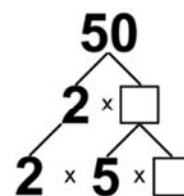
$18 =$

5) 36



$36 =$

6) 50



$50 =$