




Name \_\_\_\_\_


# Subtraction


Cross off and find the result


	$\begin{array}{r} 7 \\ -5 \\ \hline 2 \end{array}$
---	--


	$\begin{array}{r} 5 \\ -3 \\ \hline 2 \end{array}$
--	--


	$\begin{array}{r} 8 \\ -3 \\ \hline 5 \end{array}$
--	--

	$\begin{array}{r} 4 \\ -1 \\ \hline 3 \end{array}$
--	--

	$\begin{array}{r} 8 \\ -8 \\ \hline 0 \end{array}$
---	--

	$\begin{array}{r} 5 \\ -2 \\ \hline 3 \end{array}$
--	--

	$\begin{array}{r} 6 \\ -2 \\ \hline 4 \end{array}$
---	--

	$\begin{array}{r} 5 \\ -5 \\ \hline 0 \end{array}$
--	--