









NAME: \_\_\_\_\_

## EXPANDED FORM



Directions: Write each number in expanded form. Then write the number.

4 hundreds 6 tens 5 ones  $\begin{array}{r} 400 + 60 + 5 \\ \hline 465 \end{array}$	7 hundreds 8 tens 1 ones  $\begin{array}{r} 700 + 80 + 1 \\ \hline 781 \end{array}$
1 hundreds 4 tens 2 ones  $\begin{array}{r} 100 + 40 + 2 \\ \hline 142 \end{array}$	8 hundreds 5 tens 4 ones  $\begin{array}{r} 800 + 50 + 4 \\ \hline 854 \end{array}$
6 hundreds 7 tens 3 ones  $\begin{array}{r} 600 + 70 + 3 \\ \hline 673 \end{array}$	8 hundreds 7 tens 5 ones  $\begin{array}{r} 800 + 70 + 5 \\ \hline 875 \end{array}$
4 hundreds 6 tens 8 ones  $\begin{array}{r} 400 + 60 + 8 \\ \hline 468 \end{array}$	5 hundreds 2 tens 1 ones  $\begin{array}{r} 500 + 20 + 1 \\ \hline 521 \end{array}$

How Did You Do? 😊 😐 ☹️