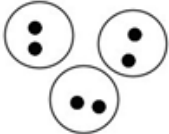













NAME: _____

MULTIPLICATION AS REPEATED ADDITION

Fill in the missing pieces in the table below. Find the sum in the repeated addition boxes and the product in the multiplication boxes!

EQUAL GROUPS	REPEATED ADDITION	ARRAY	MULTIPLICATION SENTENCE
	$2+2+2 =$		$3 \times 2 =$
	$5+5+5+5 =$		$5 \times 4 =$
	$4+4+4 =$		$3 \times 4 =$
	$6+6 =$		$2 \times 6 =$
	$8+8+8+8 =$		$8 \times 4 =$
	$7+7+7 =$		$3 \times 7 =$

How Did You Do? 😊 😐 ☹️