



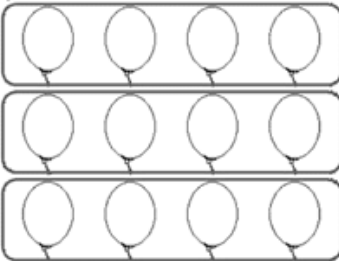
NAME: -----

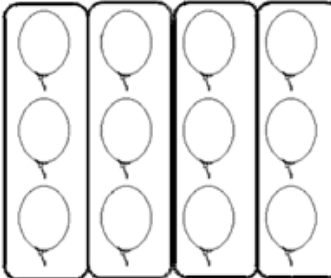
MULTIPLICATION AS REPEATED ADDITION

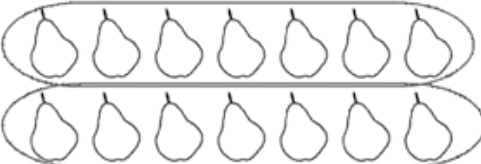
Place the multiplication digits on each line.

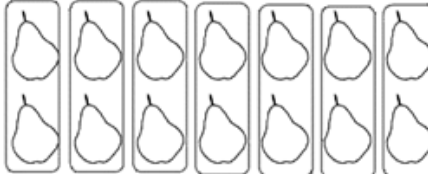
1) 
 $4 \times 2 = 8$



 $2 \times 4 = 8$


2) 
 $3 \times 4 = 12$


 $4 \times 3 = 12$

3) 
 $7 \times 2 = 14$


 $2 \times 7 = 14$

4) 
 $1 \times 5 = 5$


 $5 \times 1 = 5$

How Did You Do? 