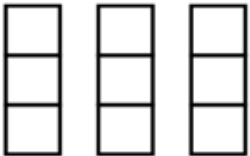
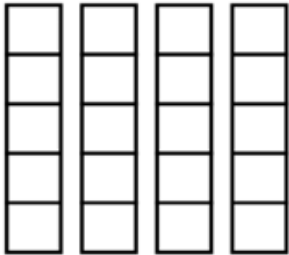
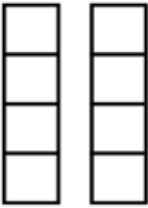



NAME: \_\_\_\_\_

## MULTIPLICATION AS REPEATED ADDITION

|   |              |                |
|---|--------------|----------------|
|    | $3+3+3=9$    | $3\times 3=9$  |
|   | $5+5+5+5=20$ | $5\times 4=20$ |
|  | $4+4=8$      | $4\times 2=8$  |
|  | $2+2+2+2=8$  | $2\times 4=8$  |

How Did You Do? 😊 😐 ☹️