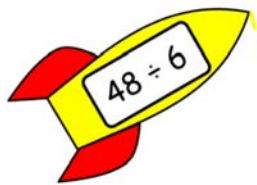
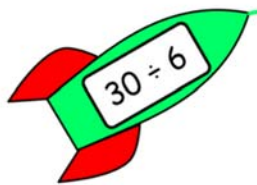
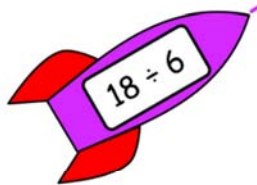
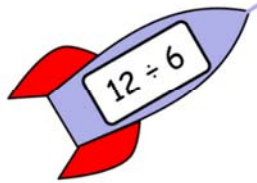



Name _____

Division Tables and Charts

Complete the division table.



3

2

6

1

5

| ÷ BY 6 | |
|----------|----|
| 6 ÷ 6 = | 1 |
| 12 ÷ 6 = | 2 |
| 18 ÷ 6 = | 3 |
| 24 ÷ 6 = | 4 |
| 30 ÷ 6 = | 5 |
| 36 ÷ 6 = | 6 |
| 42 ÷ 6 = | 7 |
| 48 ÷ 6 = | 8 |
| 54 ÷ 6 = | 9 |
| 60 ÷ 6 = | 10 |
| 66 ÷ 6 = | 11 |
| 72 ÷ 6 = | 12 |