


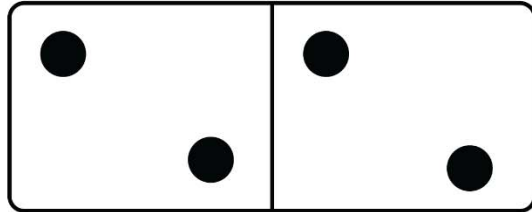
Name _____

DOMINO SUBTRACTION


Count the dots on each domino and write the subtraction sentence to complete the answer.




$$\underline{5} - \underline{3} = 2$$



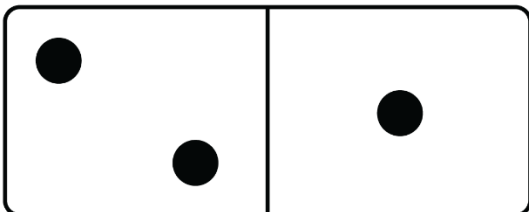
$$\underline{2} - \underline{2} = 0$$



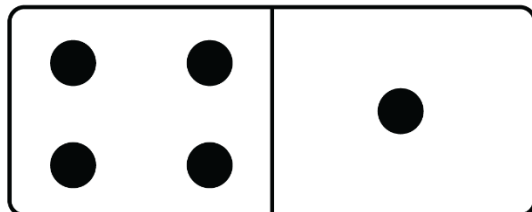
$$\underline{6} - \underline{1} = 5$$



$$\underline{9} - \underline{5} = 4$$



$$\underline{2} - \underline{1} = 1$$



$$\underline{4} - \underline{1} = 3$$