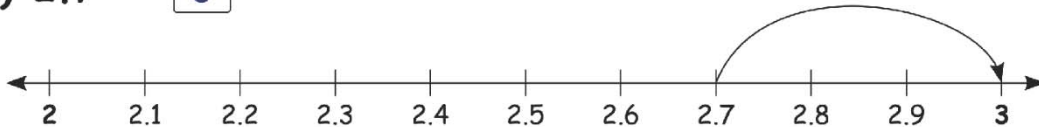


Name _____


Estimating Decimal

Round each decimal number to the nearest whole number using number line.


1) $2.7 \rightarrow$ 3




2) $4.3 \rightarrow$ 4



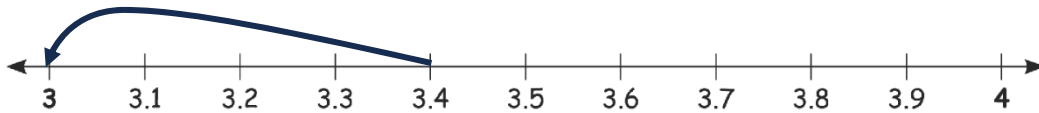
3) $6.8 \rightarrow$ 7



4) $7.1 \rightarrow$ 7



5) $3.4 \rightarrow$ 3



6) $5.7 \rightarrow$ 6

