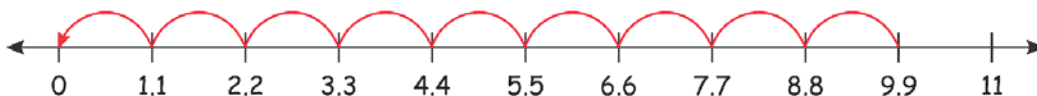


Name _____

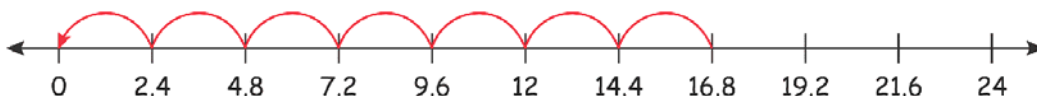
Decimal Division

Draw hops on the number line in backward to find the quotient.

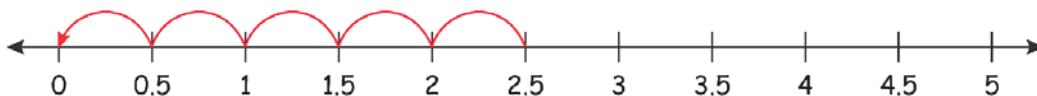
1) $9.9 \div 1.1 =$ 9



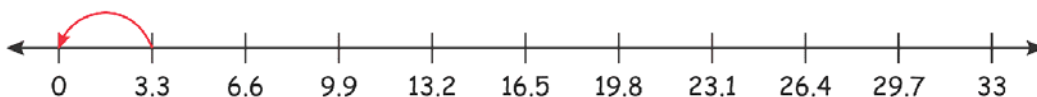
2) $16.8 \div 2.4 =$ 7



3) $2.5 \div 0.5 =$ 5



4) $3.3 \div 3.3 =$ 1



5) $0.8 \div 0.2 =$ 4

