


Name \_\_\_\_\_


# Estimating Decimal

Round each decimal number to the nearest whole number using number line.

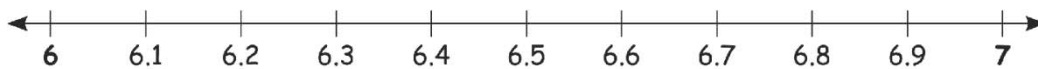
1)  $2.7 \rightarrow$




2)  $4.3 \rightarrow$




3)  $6.8 \rightarrow$



4)  $7.1 \rightarrow$



5)  $3.4 \rightarrow$



6)  $5.7 \rightarrow$

