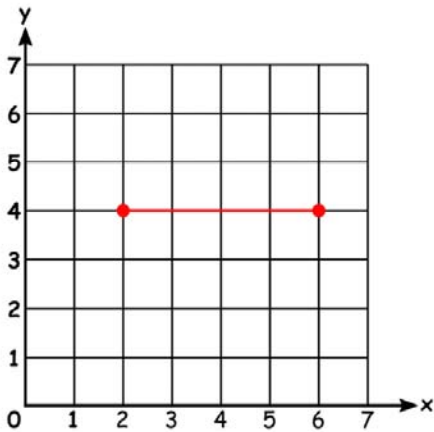


Name _____

Coordinate graphing

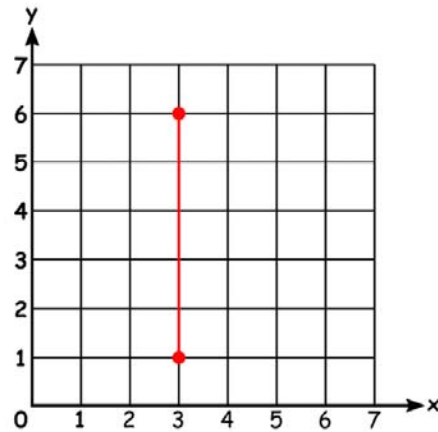
Find the length of the line segment by plotting each set of ordered pairs and joining the points.

1) (2,4), (6,4)



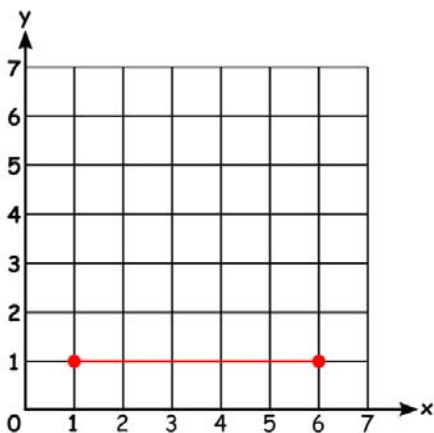
length of line segment = 4 units

2) (3,1), (3,6)



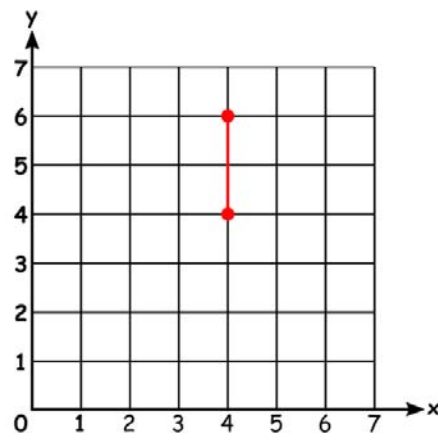
length of line segment = 5 units

3) (1,1), (6,1)



length of line segment = 5 units

4) (4,4), (4,6)



length of line segment = 2 units