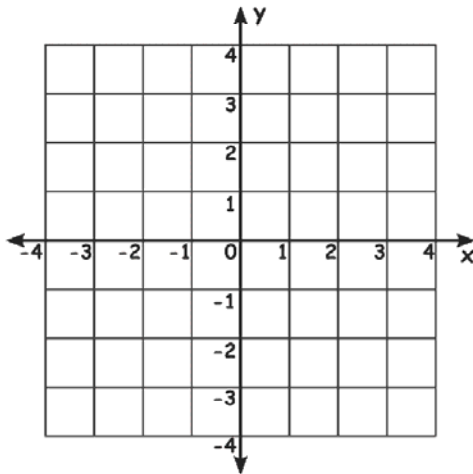


Name _____

Ordered Pair

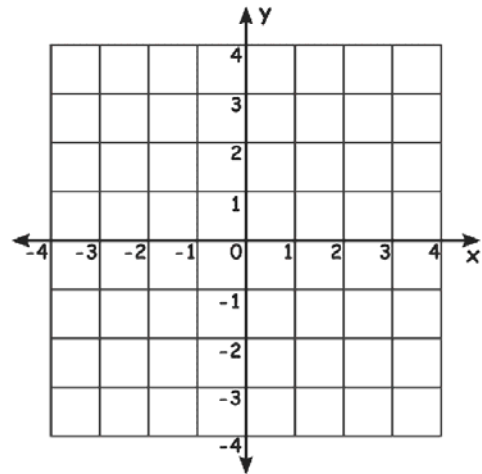
Write the point that is located at each ordered pair. Join the points from the start to endpoints to complete the figure. Write the name of shape formed

1) $(-3, -1)$, $(-2, 2)$, $(1, -1)$, $(2, 2)$



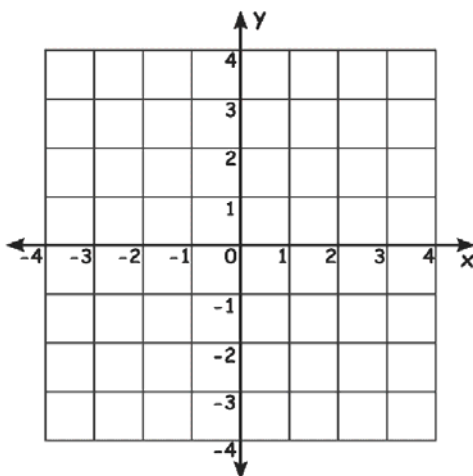
Shape: _____

2) $(-3, -2)$, $(-3, 2)$, $(3, 2)$, $(3, -2)$



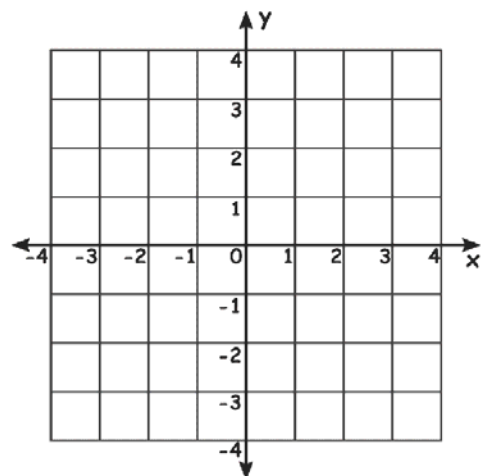
Shape: _____

3) $(-3, -2)$, $(-2, 1)$, $(2, 1)$, $(3, -2)$



Shape: _____

4) $(-3, 3)$, $(3, 3)$, $(3, -3)$, $(-3, -3)$



Shape: _____