


Name _____

Fraction, Decimal, Percentage


Shade the grid to represent the given values.
Convert the given fraction to decimals and percents.



Shade $\frac{50}{100}$ of the grid.

Decimal:


Percent: %



Shade $\frac{63}{100}$ of the grid.

Decimal:


Percent: %



Shade $\frac{28}{100}$ of the grid.

Decimal:


Percent: %



Shade $\frac{80}{100}$ of the grid.

Decimal:


Percent: %



Shade $\frac{77}{100}$ of the grid.

Decimal:


Percent: %



Shade $\frac{33}{100}$ of the grid.

Decimal:


Percent: %



Shade $\frac{45}{100}$ of the grid.

Decimal:

Percent: %



Shade $\frac{59}{100}$ of the grid.

Decimal:

Percent: %