

Name _____

Estimating Time

Estimate and draw hands to the nearest hour.

1)



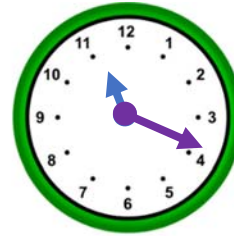
01:55

2)



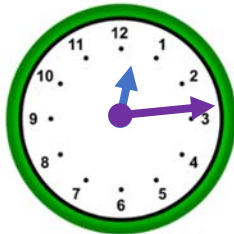
06:09

3)



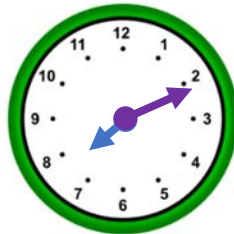
11:19

4)



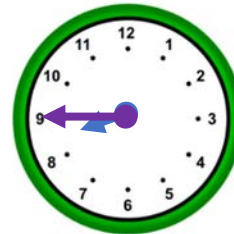
12:14

5)



07:11

6)



08:45

Estimate the following time to the nearest hour.

7)



07:00

8)



11:00

9)



03:00