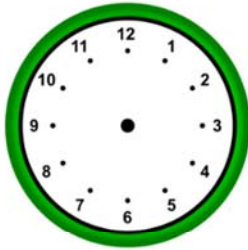


Name _____

Estimating Time

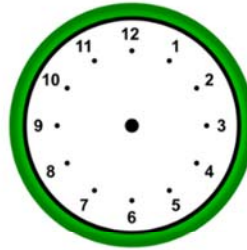
Estimate and draw hands to the nearest hour.

1)



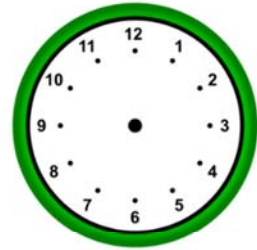
01:55

2)



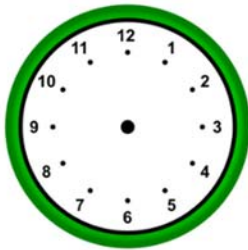
06:09

3)



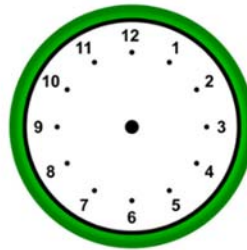
11:19

4)



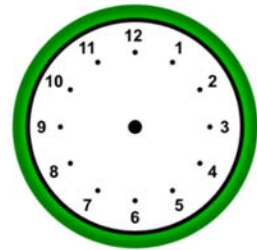
12:14

5)



07:11

6)



08:45

Estimate the following time to the nearest hour.

7)



8)



9)

