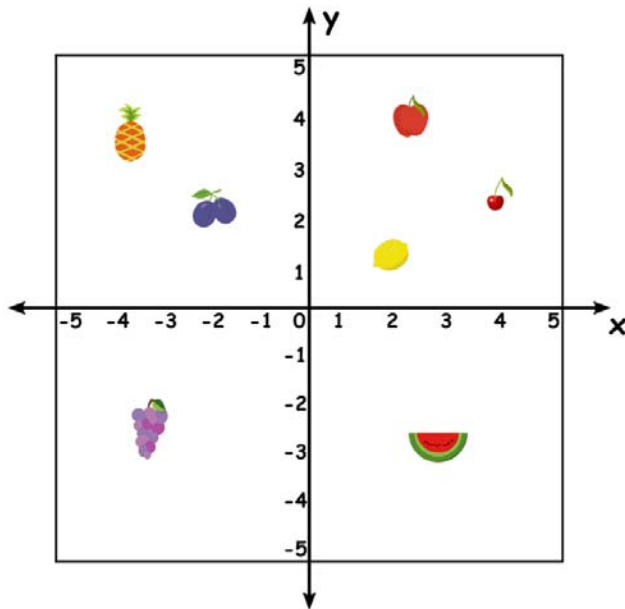









Name _____

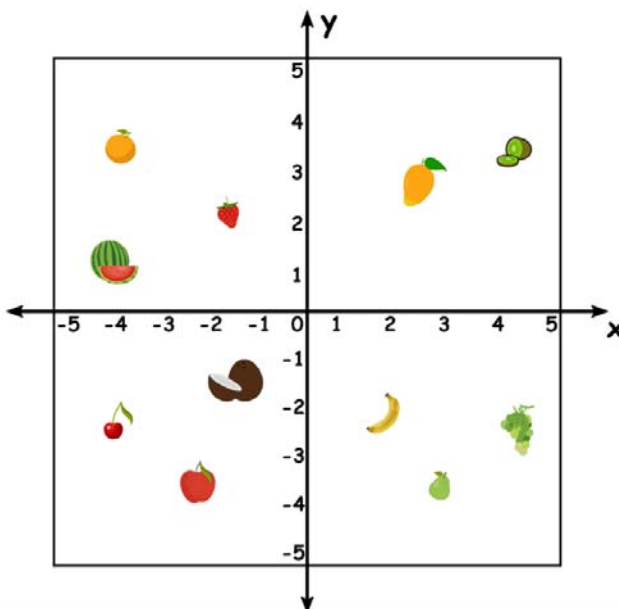
Quadrants

1) Write the quadrant where the fruit is located.



-  Quadrant I
-  Quadrant II
-  Quadrant III
-  Quadrant I
-  Quadrant I
-  Quadrant IV
-  Quadrant II

2) Write which fruit is on each quadrant.



- Quadrant I Mango, Kiwi
- Quadrant II Orange, Strawberry, Watermelon
- Quadrant III Cherry, Apple, Coconut
- Quadrant IV Banana, Pear, Grapes