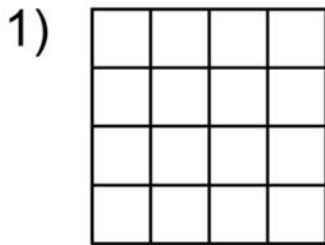


Name \_\_\_\_\_

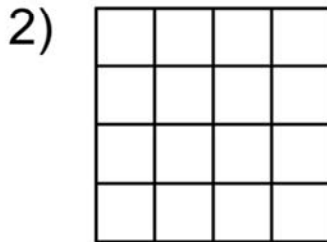
# Equivalent Fractions

Write the equivalent fraction.



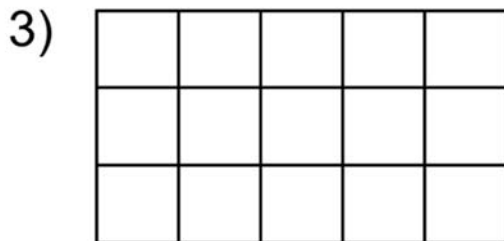
Shade  $\frac{1}{2}$  of the square.

$$\frac{1}{2} = \frac{\boxed{8}}{16}$$



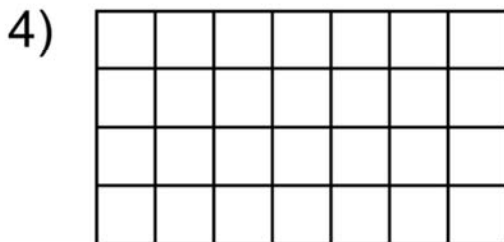
Shade  $\frac{3}{4}$  of the square.

$$\frac{3}{4} = \frac{\boxed{12}}{16}$$



Shade  $\frac{1}{3}$  of the rectangle.

$$\frac{1}{3} = \frac{\boxed{5}}{15}$$



Shade  $\frac{3}{4}$  of the rectangle.

$$\frac{3}{4} = \frac{\boxed{21}}{28}$$