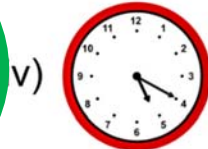
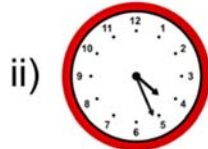



Name _____


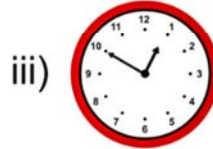

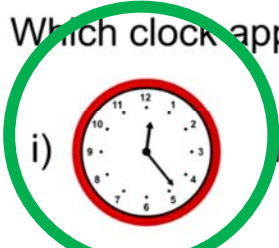
Estimating Time

Circle the following time to the nearest half hour.

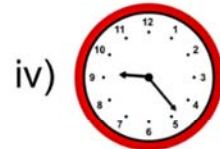
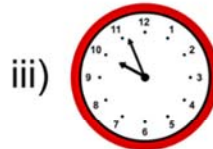
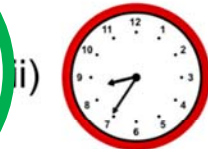
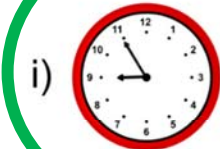
1) Which clock approximately shows 04 : 00?



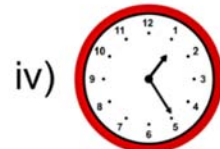
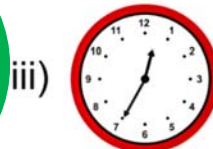
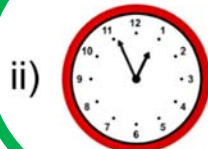

2) Which clock approximately shows 12 : 30?



3) Which clock approximately shows 09 : 00?



4) Which clock approximately shows 01 : 00?



5) Which clock approximately shows 08 : 30?

