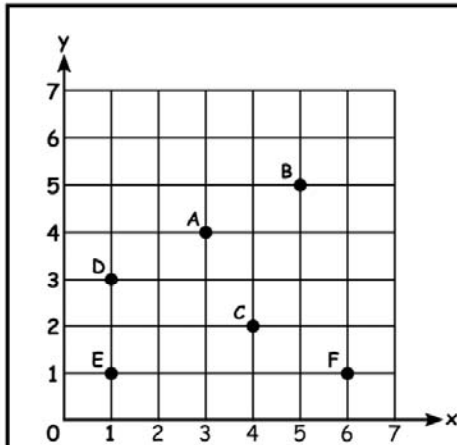


Name _____

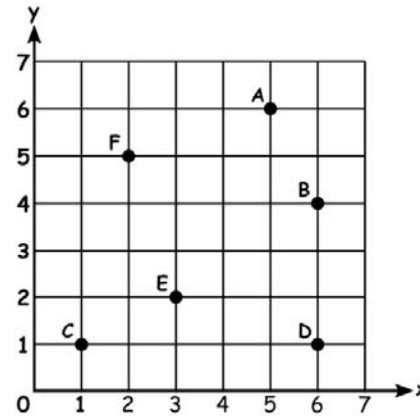
Ordered Pair

Look at the grid below and choose the correct option.



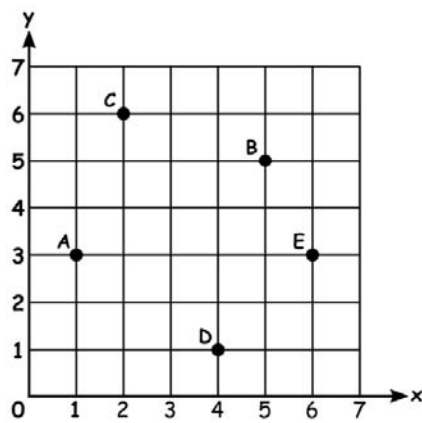
The letter A is located at?

- 1. (2,4)
- 2. (3,4)
- 3. (2,1)
- 4. (6,1)



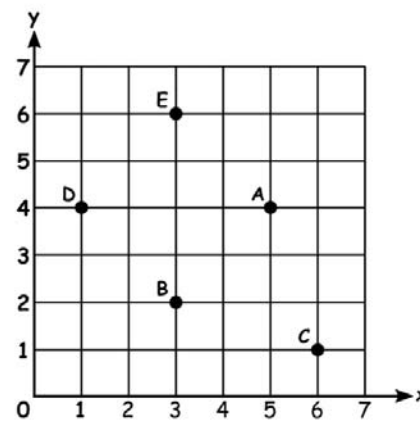
The letter B is located at?

- 1. (6,4)
- 2. (2,5)
- 3. (5,6)
- 4. (6,1)



The letter C is located at?

- 1. (4,1)
- 2. (6,3)
- 3. (2,6)
- 4. (1,3)



The letter D is located at?

- 1. (1,4)
- 2. (4,1)
- 3. (6,1)
- 4. (3,2)