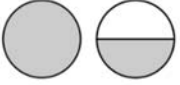
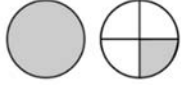
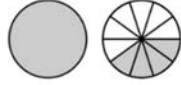
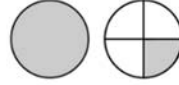
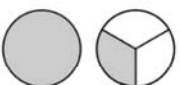
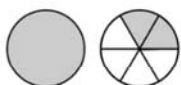


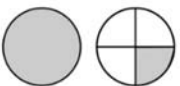
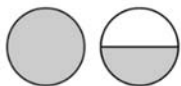
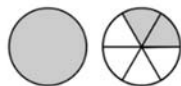
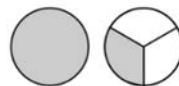
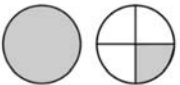
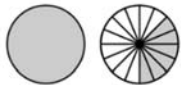
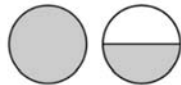
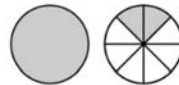
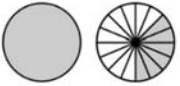
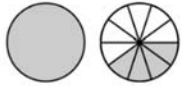
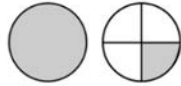
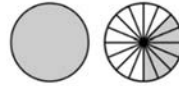


Name _____

Comparing Mixed Numbers

Put the correct symbol $>$, $<$ or $=$.

 $1\frac{1}{2}$	$>$	 $1\frac{1}{4}$	 $1\frac{4}{10}$	$>$	 $1\frac{1}{4}$
 $1\frac{1}{3}$	$=$	 $1\frac{2}{6}$	 $1\frac{2}{4}$	$>$	 $1\frac{1}{4}$
 $1\frac{1}{4}$	$<$	 $1\frac{1}{2}$	 $1\frac{2}{6}$	$=$	 $1\frac{1}{3}$
 $1\frac{1}{4}$	$<$	 $1\frac{6}{16}$	 $1\frac{1}{2}$	$>$	 $1\frac{2}{8}$
 $1\frac{6}{16}$	$<$	 $1\frac{4}{10}$	 $1\frac{1}{4}$	$<$	 $1\frac{6}{16}$