
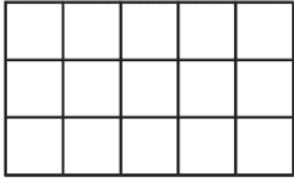
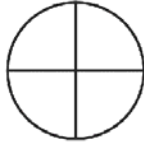
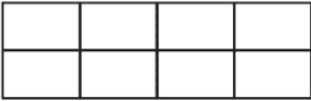
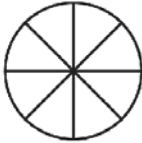
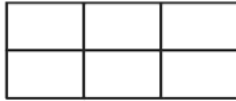
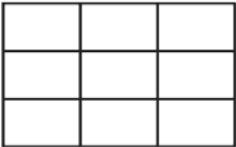
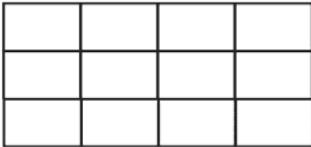
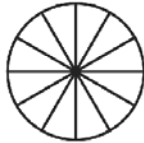


Name _____

Reduce Fractions

Color or shade the portion of each portion to represent the fraction. Then reduce the fraction to its simplest form.

 $\frac{5}{10} = \frac{1}{2}$	 $\frac{5}{15} = \frac{\quad}{\quad}$	 $\frac{2}{4} = \frac{\quad}{\quad}$
 $\frac{2}{8} = \frac{\quad}{\quad}$	 $\frac{6}{8} = \frac{\quad}{\quad}$	 $\frac{2}{6} = \frac{\quad}{\quad}$
 $\frac{3}{9} = \frac{\quad}{\quad}$	 $\frac{6}{12} = \frac{\quad}{\quad}$	 $\frac{4}{12} = \frac{\quad}{\quad}$