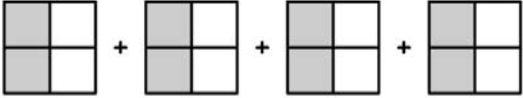

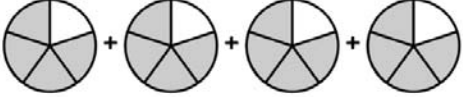

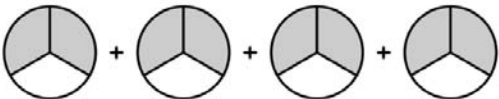
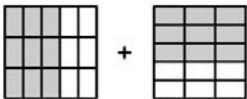


Name _____

Multiplying Fraction with Whole number

Which multiplication sentence is shown by the model?
Choose the correct option.

 <p>(i) $4 \times \frac{1}{4}$ (ii) $4 \times \frac{3}{4}$</p> <p>(iii) $4 \times \frac{1}{2}$ (iv) $3 \times \frac{1}{2}$</p>	 <p>(i) $3 \times \frac{1}{4}$ (ii) $3 \times \frac{3}{4}$</p> <p>(iii) $4 \times \frac{1}{4}$ (iv) $2 \times \frac{1}{4}$</p>
 <p>(i) $4 \times \frac{2}{5}$ (ii) $4 \times \frac{3}{5}$</p> <p>(iii) $3 \times \frac{2}{5}$ (iv) $4 \times \frac{4}{5}$</p>	 <p>(i) $6 \times \frac{5}{6}$ (ii) $3 \times \frac{5}{6}$</p> <p>(iii) $5 \times \frac{5}{6}$ (iv) $3 \times \frac{1}{6}$</p>
 <p>(i) $3 \times \frac{2}{3}$ (ii) $4 \times \frac{1}{3}$</p> <p>(iii) $3 \times \frac{1}{3}$ (iv) $4 \times \frac{2}{3}$</p>	 <p>(i) $3 \times \frac{3}{5}$ (ii) $2 \times \frac{4}{5}$</p> <p>(iii) $2 \times \frac{3}{5}$ (iv) $3 \times \frac{3}{15}$</p>