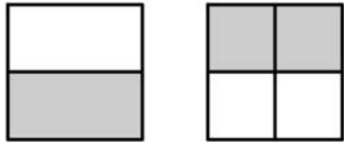


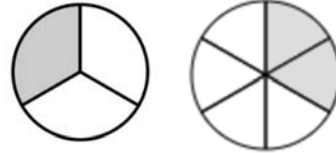
Name \_\_\_\_\_

# Equivalent Fractions

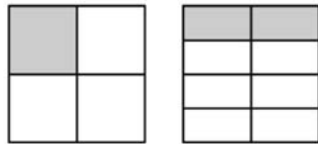
Fill in the equivalent fraction below.



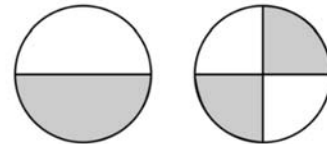
$$\frac{1}{2} = \frac{2}{4}$$



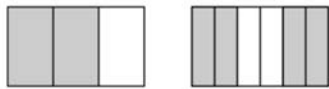
$$\frac{1}{3} = \frac{2}{6}$$



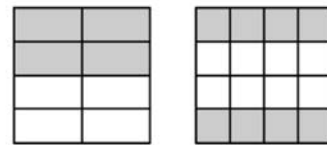
$$\frac{1}{4} = \frac{2}{8}$$



$$\frac{1}{2} = \frac{2}{4}$$



$$\frac{2}{3} = \frac{4}{6}$$



$$\frac{4}{8} = \frac{8}{16}$$