

Name _____

Decimal Division

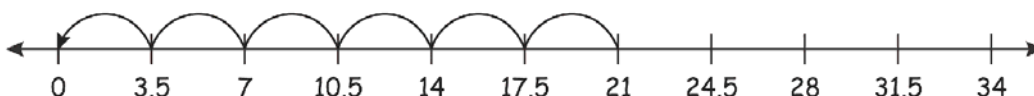
Fill in the missing number to complete the division sentence.

1)



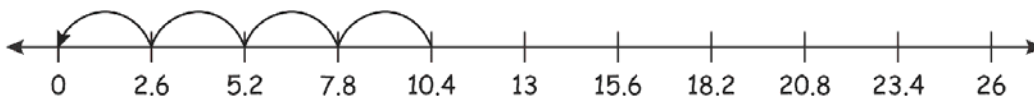
$$\boxed{2.7} \div \boxed{0.9} = \boxed{3}$$

2)



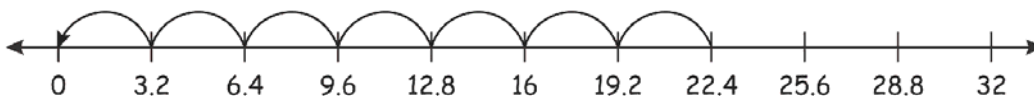
$$\boxed{21} \div \boxed{3.5} = \boxed{6}$$

3)



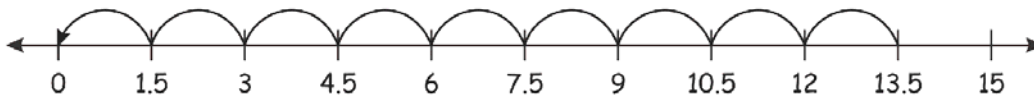
$$\boxed{10.4} \div \boxed{2.6} = \boxed{4}$$

4)



$$\boxed{22.4} \div \boxed{3.2} = \boxed{7}$$

5)



$$\boxed{13.5} \div \boxed{1.5} = \boxed{9}$$