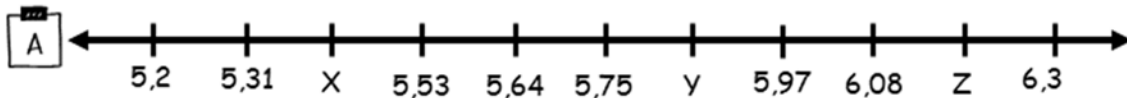


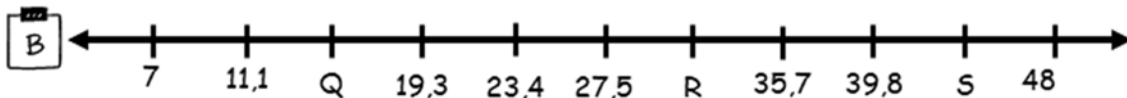
NAME: _____

DECIMALS ON A NUMBER LINE

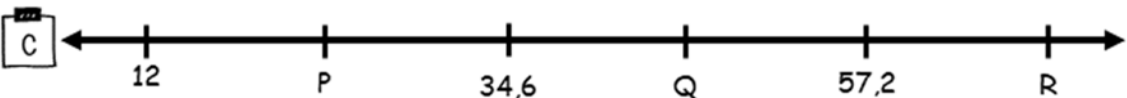
What numbers do the letters in each number line represent?



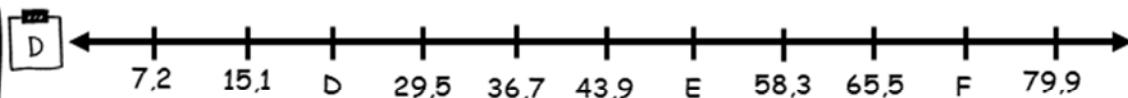
X = _____ ; Y = _____ ; Z = _____



Q = _____ ; R = _____ ; S = _____



P = _____ ; Q = _____ ; R = _____



D = _____ ; E = _____ ; F = _____

How Did You Do?