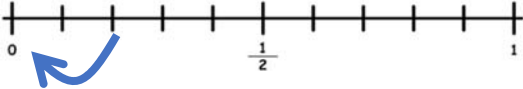
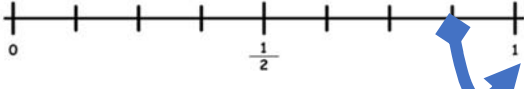

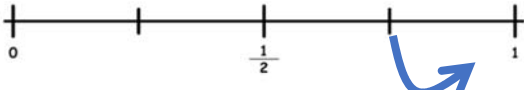
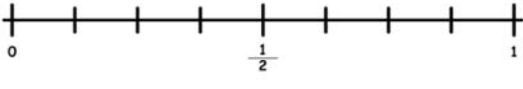
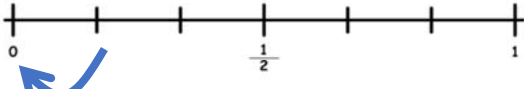
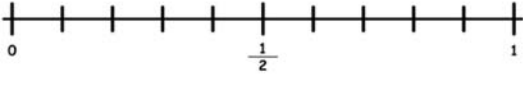
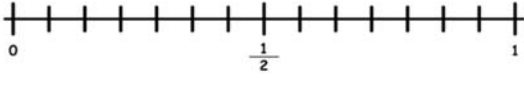
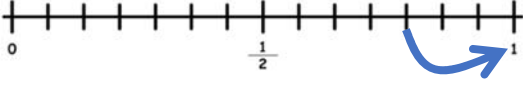
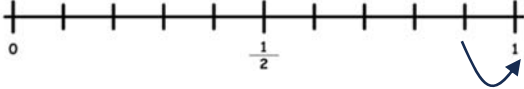


Name \_\_\_\_\_

# Estimating Fractions

Round each fraction to the nearest of these values ( $0$ ,  $\frac{1}{2}$ ,  $1$ ) using the number line.

|   |  |
|---|--|
| $\frac{2}{10} = \boxed{0}$<br>             | $\frac{7}{8} = \boxed{1}$<br>              |
| $\frac{5}{6} = \boxed{1}$<br>              | $\frac{3}{4} = \boxed{1}$<br>              |
| $\frac{4}{8} = \boxed{\frac{1}{2}}$<br>  | $\frac{1}{6} = \boxed{0}$<br>            |
| $\frac{5}{10} = \boxed{\frac{1}{2}}$<br> | $\frac{7}{14} = \boxed{\frac{1}{2}}$<br> |
| $\frac{11}{14} = \boxed{1}$<br>          | $\frac{9}{10} = \boxed{1}$<br>           |