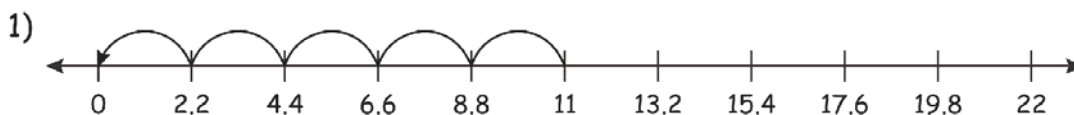


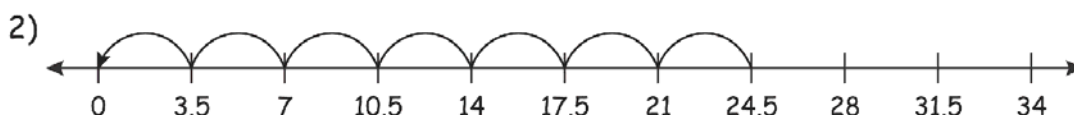
Name \_\_\_\_\_

# Decimal Division

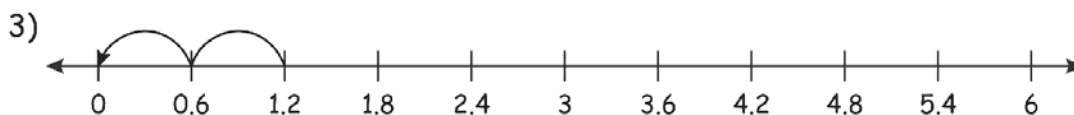
Fill in the missing number to complete the division sentence.



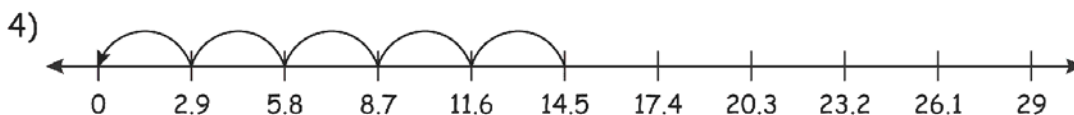
$$\boxed{11} \div 2.2 = 5$$



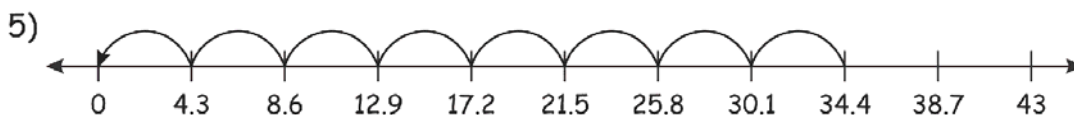
$$24.5 \div \boxed{3.5} = 7$$



$$1.2 \div 0.6 = \boxed{2}$$



$$14.5 \div \boxed{2.9} = 5$$



$$\boxed{34.4} \div 4.3 = 8$$