

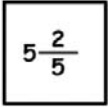
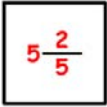

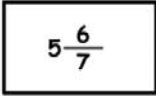



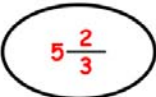

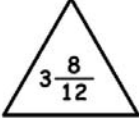



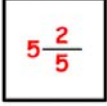
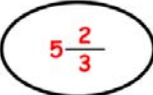
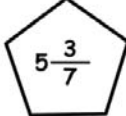
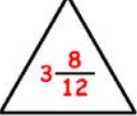
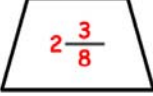
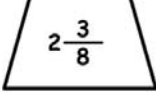

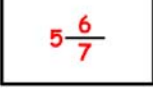


Name _____

Dividing Mixed Numbers

Write the correct number in the shape and divide them.

	÷		=	$\frac{77}{223}$	
	÷		=	$\frac{243}{335}$	
	÷		=	$\frac{7}{16}$	
	÷		=	$1 \frac{26}{93}$	
	÷		=	$\frac{31}{38}$	
	÷		=	$\frac{81}{85}$	
	÷		=	$1 \frac{31}{57}$	
	÷		=	$1 \frac{100}{369}$	