
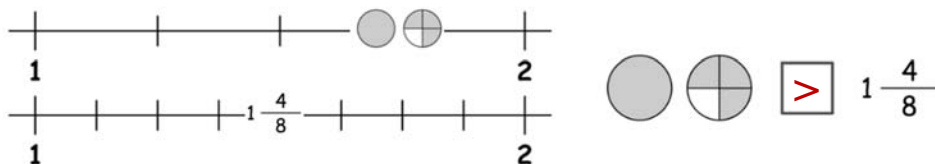



Name _____

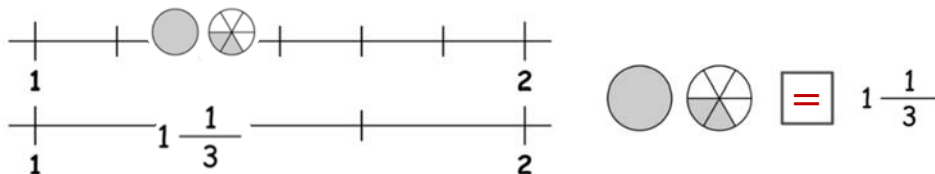
Comparing Mixed Numbers


Place each fraction on their number line and compare $>$, $<$ or $=$.

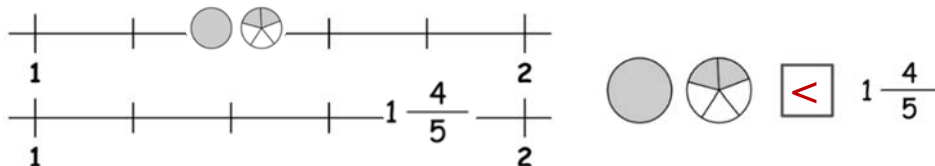
1. Place  and $1\frac{4}{8}$ on the number lines.




2. Place  and $1\frac{1}{3}$ on the number lines.



3. Place  and $1\frac{4}{5}$ on the number lines.



4. Place  and $1\frac{1}{8}$ on the number lines.

