
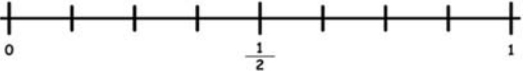





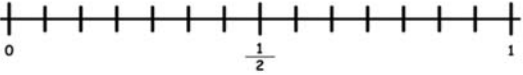
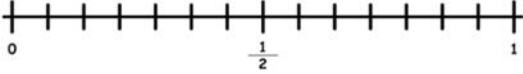


Name \_\_\_\_\_

# Estimating Fractions

Round each fraction to the nearest of these values ( $0$ ,  $\frac{1}{2}$ ,  $1$ ) using the number line.

$\frac{2}{10} = \square$ 	$\frac{7}{8} = \square$ 
$\frac{5}{6} = \square$ 	$\frac{3}{4} = \square$ 
$\frac{4}{8} = \square$ 	$\frac{1}{6} = \square$ 
$\frac{5}{10} = \square$ 	$\frac{7}{14} = \square$ 
$\frac{11}{14} = \square$ 	$\frac{9}{10} = \square$ 