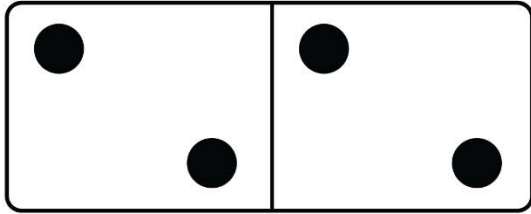



Name _____

DOMINO ADDITION

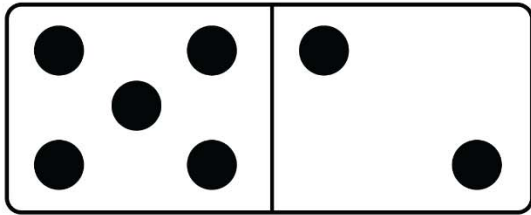
Count the number of dots on each domino and fill in the total.




$$\underline{\quad} \quad \underline{\quad} = \boxed{4}$$



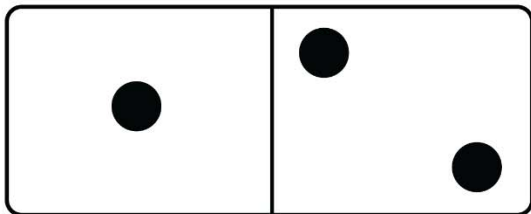
$$\underline{\quad} \quad \underline{\quad} = \boxed{8}$$



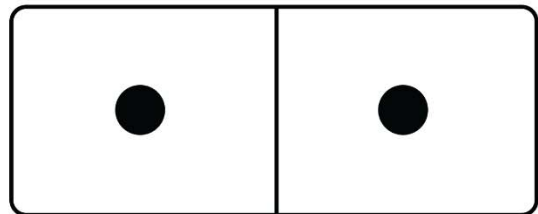
$$\underline{\quad} \quad \underline{\quad} = \boxed{7}$$



$$\underline{\quad} \quad \underline{\quad} = \boxed{9}$$



$$\underline{\quad} \quad \underline{\quad} = \boxed{3}$$



$$\underline{\quad} \quad \underline{\quad} = \boxed{2}$$