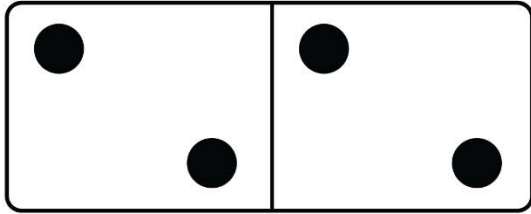



Name _____

DOMINO ADDITION

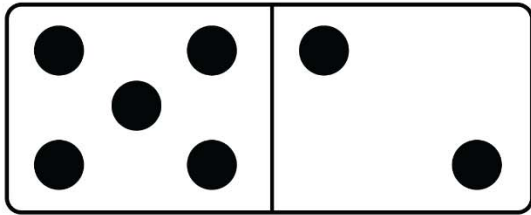
Count the number of dots on each domino and fill in the total.




$$\underline{\quad} + \underline{\quad} = \square$$



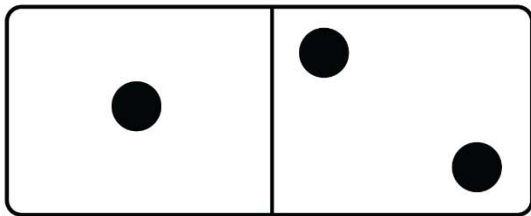
$$\underline{\quad} + \underline{\quad} = \square$$



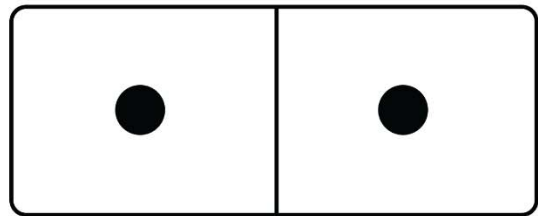
$$\underline{\quad} + \underline{\quad} = \square$$



$$\underline{\quad} + \underline{\quad} = \square$$



$$\underline{\quad} + \underline{\quad} = \square$$



$$\underline{\quad} + \underline{\quad} = \square$$