




Name _____


DOMINO ADDITION


Count the dots, write the numbers and add to find the answer.


	<input type="text"/>	+	<input type="text"/>	+	<input type="text"/>	=	<input type="text"/>
---	----------------------	---	----------------------	---	----------------------	---	----------------------

	<input type="text"/>	+	<input type="text"/>	+	<input type="text"/>	=	<input type="text"/>
---	----------------------	---	----------------------	---	----------------------	---	----------------------

	<input type="text"/>	+	<input type="text"/>	+	<input type="text"/>	=	<input type="text"/>
--	----------------------	---	----------------------	---	----------------------	---	----------------------

	<input type="text"/>	+	<input type="text"/>	+	<input type="text"/>	=	<input type="text"/>
---	----------------------	---	----------------------	---	----------------------	---	----------------------

	<input type="text"/>	+	<input type="text"/>	+	<input type="text"/>	=	<input type="text"/>
---	----------------------	---	----------------------	---	----------------------	---	----------------------

	<input type="text"/>	+	<input type="text"/>	+	<input type="text"/>	=	<input type="text"/>
---	----------------------	---	----------------------	---	----------------------	---	----------------------