







NAME: \_\_\_\_\_

## COUNTING IN GROUPS

Directions: Count the objects and circle the amount.

	1 4 <b>2</b>		3 <b>1</b> 4
	<b>4</b> 2 5		3 1 <b>5</b>
	2 5 <b>3</b>		<b>2</b> 1 4

How Did You Do? 😊 😐 ☹️