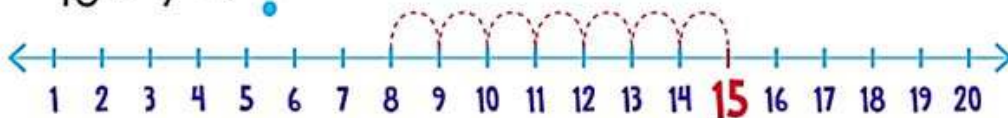


NAME: _____

COUNT BACK TO SUBTRACT

Count Back to Subtract using the number line. Circle the correct total.

$15 - 7 = ?$



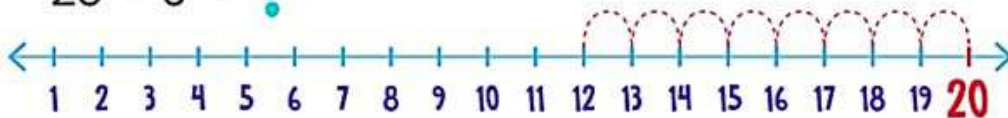
8

7

5

6

$20 - 8 = ?$



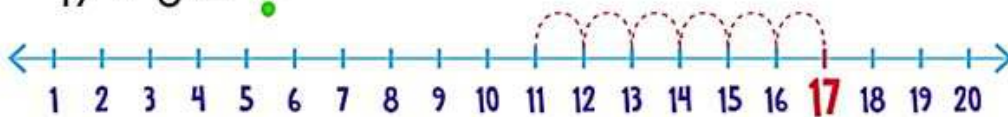
9

11

12

10

$17 - 6 = ?$



9

8

11

15

How Did You Do? 😊 😐 ☹️