




NAME: _____


DECIMAL MULTIPLICATION


Directions: Use the Pet Store list to find the price of each item. Then find the total price for 2 of each item.


1.  \$ 6.25
X 2
Total \$ 12.50


2.  \$ 79.89
X 2
Total \$ 159.78


3.  \$ 12.60
X 2
Total \$ 25.20

4.  \$ 14.23
X 2
Total \$ 28.46

5.  \$ 4.25
X 2
Total \$ 8.50

6.  \$ 0.89
X 2
Total \$ 1.78

7.  \$ 8.35
X 2
Total \$ 16.70

8.  \$ 2.19
X 2
Total \$ 4.38

How Did You Do? 😊 😐 ☹️