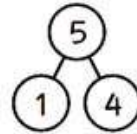



NAME: _____

SUBTRACTION


Find the differences. Look at the example.



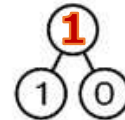
$$2 - 1 = 1$$



$$4 - 3 = 1$$



$$1 - 1 = 0$$



$$2 - 2 = 0$$



How Did You Do?